

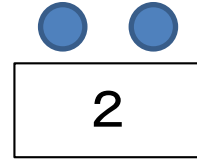
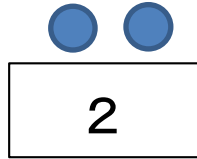
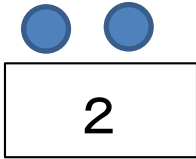

# わりざん きほん①

なまえ \_\_\_\_\_



1.  に、すうじをいれよう！

EX) 6コを 3つにわけると？






しき

$6 \div 3 = 2$

こたえ

2




① 8コを 4つにわけると？



しき

こたえ

② 15コを 3つにわけると？



しき

こたえ

③ 6コを 2つにわけると？



しき

こたえ

① 2, 2, 2, 2 しき  $8 \div 4 = 2$  こたえ 2 ② 5, 5, 5 しき  $15 \div 3 = 5$  こたえ 5

③ 3, 3  $6 \div 2 = 3$  こたえ 3